

Reg. No 

--	--	--	--	--	--	--	--	--	--	--	--	--	--	--

Time: 2 Hours

Max. Marks: 100

Name of the student: ..... Div: .....

Name of the school : .....

**Instructions:**

- All questions are compulsory.
- All objective questions carry 2 marks each.
- Skill assessment questions carry 10 marks each.
- The total marks for the exam are 100.
- Choose the most appropriate answer from the given options and use the provided answer sheet for recording your answers

**1. Complete the series.**

4, 8, 12, 16, \_\_\_\_

- a) 14                      b) 16                      c) 18                      d) 20

**2. Look at the image provided. Which of these is not capable for photosynthesis?**



- a) Fern                      b) Mushroom  
c) Rose                      d) Maple tree

**3. Which of the following is half of 100?**

- a) 25                      b) 40                      c) 50                      d) 60


**4. Which of the following sentences is correct?**

- a) He don't like milk.                      b) He doesn't likes milk.  
c) He doesn't like milk.                      d) He don't likes milk.

5. Which of the following has three sides?

- a) Rectangle
- b) Triangle
- c) Circle
- d) Square

6. View the image provided. Identify which simple machine is depicted as a wheel and axle.




- a) Image 1
- b) Image 2
- c) Image 3
- d) Image 4

7. What is the product of 7 and 8?

- a) 56
- b) 60
- c) 65
- d) 54

8. Observe the flag and identify the country?



- a) Japan
- b) Brazil
- c) Canada
- d) France

9. How many minutes are two hours?

- a) 60
- b) 120
- c) 240
- d) 180

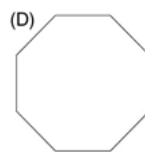
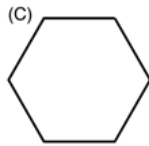
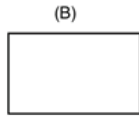
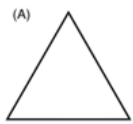
10. Which is the largest organ in the human body?

- a) Heart
- b) Liver
- c) Skin
- d) Brain

11. What type of animal is a frog?

- a) Mammal
- b) Bird
- c) Reptile
- d) Amphibian

**12. Observe the images provided. Which of these shapes has the most sides?**



- a) Triangle
- c) Hexagon

- b) Rectangle
- d) Octagon


**13. If you have 4 bags of apples and each bag has 5 apples, how many apples do you have in total?**

- a) 20
- c) 25
- b) 9
- d) 10

**14. What causes day and night?**

- a) The Moon blocking the Sun
- c) Clouds covering the Sun
- b) The Earth spinning on its axis
- d) The Sun moving around the Earth


**15. Look at the image provided. Identify which coin is from Japan.**



A.



B.



C.



D

- a) A
- b) B
- c) C
- d) D

**16. What is evaporation?**

- a) Water turning into ice
- b) Water turning into steam
- c) Oil turning into vapour
- d) Juice freezing overnight

**17. Choose the correct spelling.**

- a) Bannana
- c) Bananna
- b) Banana
- d) Banaana

**18. What is a habitat?**

- a) A place where animals go for vacation
- b) The natural home of a plant or animal
- c) A type of zoo
- d) A large park

**19. Which of the following is not a function of the skeleton?**

- a) To provide shape and support to the body
- b) To protect internal organs
- c) Helps in movement of the body
- d) To digest food

**20. What do you call animals that eat only plants?**

- a) Carnivores
- b) Omnivores
- c) Herbivores
- d) Insectivores

**21. Subtract 205 from 500.**

- a) 305
- b) 295
- c) 315
- d) 205

**22. How did Gandhi fight for India's independence?**

- a) Violence
- b) Non-violence (Ahimsa)
- c) Secret meetings
- d) War

**23. Why is the Sun important to Earth?**

- a) It provides light only at night
- b) It helps to cool the Earth
- c) It provides the light and warmth necessary for life
- d) It provides dark during day time

**24. Which of the following is the synonym for 'begin'?**

- a) Finish
- b) Start
- c) Continue
- d) End

**25. What type of word is 'quickly'?**

- a) Adjective
- b) Adverb
- c) Noun
- d) Verb

**26. How do fish breathe underwater?**

- a) With lungs
- b) With gills
- c) With nostrils
- d) With skin

**27. What is the sum of 123 and 456?**

- a) 579
- b) 678
- c) 589
- d) 679

**28. Which of the following means the opposite of 'include'?**

- a) Add
- b) Incorporate
- c) Exclude
- d) Involve

**29. Fill in the blank. "She \_\_\_\_\_ a book."**

- a) readed
- b) readable
- c) read
- d) reading

**30. What is the past tense of 'sing'?**

- a) Sung
- b) Sang
- c) Singed
- d) Sanged

**31. Which planet is known as the "Blue Planet"?**

- a) Mars
- b) Earth
- c) Jupiter
- d) Venus

**32. Who was the first person to land on the Moon?**

- a) Yuri Gagarin
- b) Neil Armstrong
- c) Buzz Aldrin
- d) Michael Collins

**33. Which of the following is the national sport of India?**

- a) Cricket
- b) Field hockey
- c) Football
- d) Badminton

**34. Who wrote the famous book "Harry Potter"?**

- a) J.K. Rowling
- b) Roald Dahl
- c) Enid Blyton
- d) Stephen King

**35. Which monument is known as the symbol of love?**

- a) Eiffel Tower
- b) Statue of Liberty
- c) Taj Mahal
- d) Great Wall of China

**36. What number do you get when you multiply any number by zero?**

- a) The same number
- b) 1
- c) 0
- d) 100

**37. Choose the correct plural form of ‘mouse’.**

- a) Mices
- b) Mouses
- c) Mice
- d) Mousees

**38. Arif Mohammed Khan is the governor of \_\_\_\_\_?**

- a) Tamil Nadu
- b) Kerala
- c) Karnataka
- d) Maharashtra

**39. Which animal is known for its ability to change colours?**


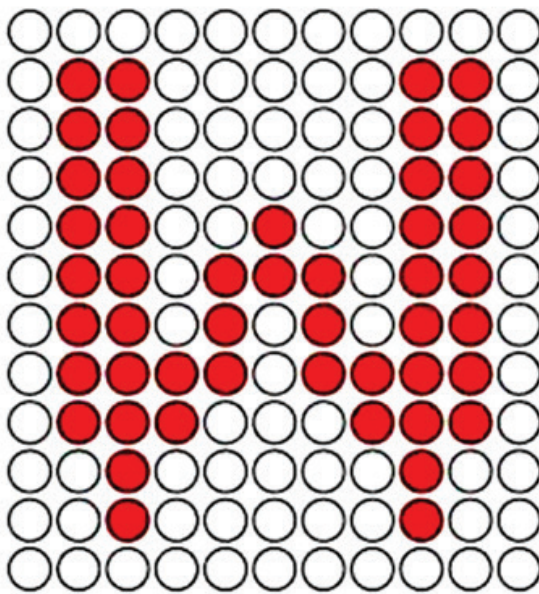
- a) Rabbit
- b) Chameleon
- c) Lion
- d) Elephant

**40. If you face North and turn 90 degree to your right, which direction are you facing now?**

- a) East
- b) West
- c) South
- d) North

### **Skill Assessment**

**I. Look at the letter “W” on the left side of the grid. Draw the same “W” on the right side of the grid, making sure it looks exactly the same as the one on the left.**



II. Colour the horse using colour pencils as shown in the picture.

