

--	--	--	--	--	--	--	--	--	--

To be filled in by the invigilator

Time: 2 Hours
Max. Marks: 100

Name of the student:..... Div:

Name of the school:

Instructions to the invigilators:

1. Instruct all the kids to sit.
2. Call one kid at a time to the invigilator's table and write his/her name, Reg. No. and School name on the question paper.
3. Complete the oral questions (Q. No. 1-10) and put marks in the question paper.
4. Explain each question one by one and ask them to answer.
5. Please **DO NOT GIVE** marks for Q. No. 11-31
6. When all the questions are finished, collect the question paper and sign on it.



1. How many balloons can you spot?

(2x9=18 Marks)

2. Cross out the object that is not seen in the picture



3. How many red caps are there?

4. There are 2 boys and 1 girl

TRUE	FALSE
------	-------





5. Tick the boy's cap colour

<input type="checkbox"/>	<input type="checkbox"/>	<input type="checkbox"/>
--------------------------	--------------------------	--------------------------

6. What is the colour of your hair?
7. Say the names of two animals in English language
8. How old are you ?
9. How many sides does a triangle have?
10. Recite 4 lines of any rhyme in your mother tongue. (4 Marks)

Count the images and circle the correct number

(3x4=12 Marks)

11.		<input type="radio"/> 5	<input checked="" type="radio"/> 4
		<input type="radio"/> 3	<input type="radio"/> 6
12.		<input checked="" type="radio"/> 7	<input type="radio"/> 5
		<input type="radio"/> 6	<input type="radio"/> 4
13.		<input type="radio"/> 10	<input type="radio"/> 8
		<input type="radio"/> 7	<input type="radio"/> 9
14.		<input type="radio"/> 7	<input type="radio"/> 9
		<input type="radio"/> 8	<input type="radio"/> 10

Read and count

Connect the letters with the images that begin with

(2x4=8 Marks)

15.



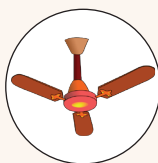
16.



17.



18.

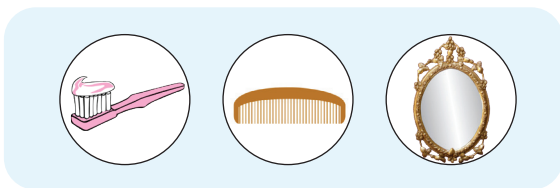


19. Which of the following is **NOT** a vegetable? Tick on it

(2 Marks)

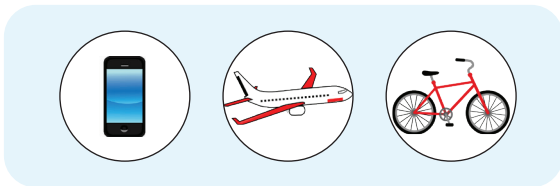


20. Tick the one you use to comb your hair



(2 Marks)

21. Cross out the one which is **NOT** a mode of transportation

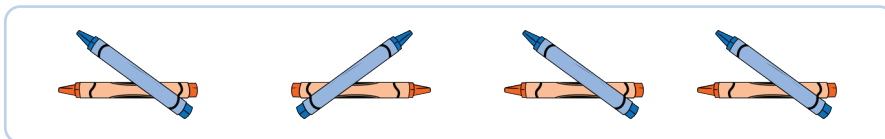


(2 Marks)

Find the odd one in each set and circle it.

(3x3=9 Marks)

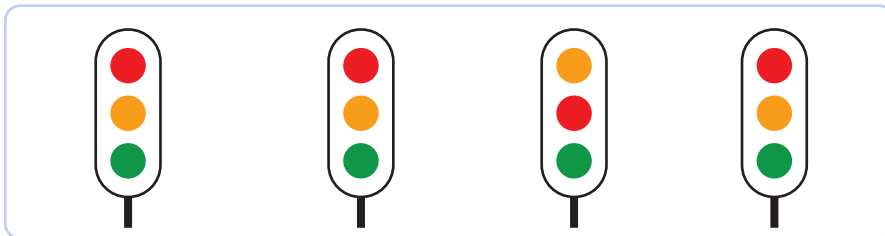
22.



23.




24.



25. Connect the animals with their shadows

(4 Marks)



Write the beginning letters of the given images

(3x4=12 Marks)

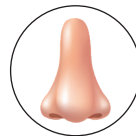
26.




27.



28.




29.



30. Colour the butterfly

(12 Marks)



31. Complete the picture and colour it

(15 Marks)

