





Name of the student:..... Div:.....

Name of the School:





Question 1 to 20 Carry 1 Mark each

(20)





1. Which of the following is a creeper?

a)	b)	c)	d)
			
Money plant	Water melon plant	Pepper vine	Grapevine





2. 85% of plants are found in the

a)	b)	c)	d)
			
Desert	Forest	Ocean	Paddy field





3. Which of the following is not an insect?

a)	b)	c)	d)
			
Humming bird	House fly	Beetle	Butterfly

4. Which is an amphibian?

a)	b)	c)	d)
			
Tortoise	Crocodile	Crab	Frog

5. I am not a bird, but I can fly. Who am I?

a)	b)	c)	d)
			
Ostrich	Bat	Penguin	Hen

6. Which of the following is the solid form of water?

- a) Hot water
- b) Steam
- c) Ice cube
- d) All of these

7. Which of the following is not a component of air?

- a) Smoke
- b) Oxygen
- c) Water vapour
- d) Nitrogen





8. Find the incorrect pair

- a) Winter - Woolen clothes
- b) Spring - Sweaters
- c) Monsoon - Rain coats
- d) Summer - Cotton clothes

9. World water day is celebrated on

- a) June -5
- b) March -22
- c) April – 22
- d) March -21

10. Gills are respiratory organ of

a)	b)	c)	d)
			
Frog	Spider	Earthworm	Fish

11. Most of the Earth is covered with

- a) Land b) Soil c) Water d) Plants





12. Moon is a

- a) Satellite b) Planet c) Sun d) None of these

13. What should the driver do while seeing red signal in a traffic junction?

- a) Slow down the vehicle b) Stop the vehicle
c) Take a U turn d) Take the vehicle forward

14. Which of the following traffic signal indicates a railway crossing?

a)	b)	c)	d)
			

15. Which one of the following is not a good habit?

- a) Playing with sharp objects
b) Playing in the ground
c) Washing hands before and after food
d) Brushing teeth before sleeping

16. What does UPS stand for?



- a) Unit Power Support
b) Universal Power Support
c) Uninterrupted Power Supply
d) Unique Power Supply





17.







It is adevice

- a) Output device
- b) Input device
- c) Sound device
- d) Communication device





18. Who among the following treats us when we are sick?

a)	b)	c)	d)
			
DOCTOR	POLICE	CARPENTER	BAKER

19. Which of the following sport is tennis?

a)	b)	c)	d)
			





20. Who is the present Chief Minister of Kerala?

a)	b)	c)	d)
			
VS Achuthanandan	VD Satheesan	Rahul Gandhi	Pinarayi Vijayan

Question 21 to 24 carry 1.5 marks each

(6)

Match the following world famous architecture buildings

Column – A	Column – B
21. Leaning tower of PISA	a) 
22. Burj Khalifa	b) 
23. Taj Mahal	c) 
24. Eiffel Tower	d) 

Question 25 to 40 carry 2 marks each

(32)

25. Which of the following is the smallest 3 digit number?

- a) 100 b) 10 c) 101 d) 111

26. 8 hundreds , 7 tens and 2 ones make

- a) 827 b) 287 c) 782 d) 872

27. 4 hundreds and 2 ones make

- a) 204 b) 402 c) 420 d) 240

28. Which of the following shapes is made of curves?

- a) circle b) rectangle c) square d) triangle

29. Which number should be added to 111 to get 200?

- a) 99 b) 89 c) 109 d) 999

30. What is the sum of the smallest two digit number and the smallest three digit number?

- a) 111 b) 110 c) 199 d) 200

31. 123, 234, 345, -----

- a) 567 b) 678 c) 456 d) none of these.

32. School: Teacher :: Court : -----

- a) Doctor b) Judge c) Carpenter d) Nurse

33. Find the odd one

- a) 625 b) 825 c) 725 d) 900

34. Which letter is in the 5th position from both ends?



- a) W b) X c) O d) Z

35. Which of the following two days come between Friday and Monday ?

- a) Sunday and Tuesday b) Saturday and Thursday
c) Sunday and Saturday d) Sunday and Wednesday

36. Which one is equal to $9+6+8$?

- a) $9+5+7$ b) $9+1+5+8$ c) $8+1+7+6$ d) $8+7+9$

37. Which of the following is not equal to 123?

- a) 1 hundred+2 tens + 3 ones b) 1 hundred+23 ones
c) 12 tens + 3 ones d) 1 hundred+3 tens + 2 ones

38. Anu got 16 sweets and Manu got 9 sweets. Which is not a correct statement among the following?

- a) Anu got 7 more than Manu
b) Manu got 7 less than Anu.
c) Anu and Manu got 25 sweets in total.
d) Manu got 7 more than Anu.

39. How many numbers are there from 62 to 71 including 62 and 71?

- a) 10 b) 9 c) 11 d) 12

40. Which of the following is a correct statement?

- a) There are 10 two digit numbers with zero in ones place.
b) There are 100 two digit numbers in total?
c) The smallest two digit number is 11.
d) There are 90 two digit numbers in total.

Question 41 to 48 carry 1.5 marks each

(12)

41. Choose the correctly spelled word

- a) Bekos
- b) becouse
- c) Because
- d) Becaus

42. which of the following is a pair of Antonyms?

- a) Difficult - easy
- b) begin - Start
- c) beautiful - attractive
- d) near - close

43. This baby is very cute. Replace the underlined word with its synonym.

- a) smart
- b) ugly
- c) bright
- d) pretty

Read the poem and answer the following questions.

Ice cream

Ice cream in a bowl
Ice cream in a corn
Ice cream any way I want
As long as it's my own
Ice cream can be sticky
Ice cream can be sweet
Ice cream is delicious
It is my favourite treat

44. Ice creams are kept in

- a) In bowls
- b) In corn
- c) Plates
- d) Both a and b

45. Ice cream can be

- a) sweet
- b) bitter
- c) sticky
- d) both a and c

46. Ice cream is delicious. Replace the underlined word with another word


Similar in meaning

- a) tasty
- b) sweet
- c) good
- d) bitter

47. My favourite treat in this poem is;

- a) Chocolate
- b) Corn
- c) Lollipop
- d) Ice cream

48. look at the picture given below and choose the correct word for that.




- a) Sun
- c) Moon

- b) Star
- d) Apple

49. Complete the drawing of the butterfly within the grids and colour it as shown in the picture.

(15)



50. Colour the scenery.

(15)

