

INTERNATIONAL SCHOLASTIC TALENT TEST(ISTT) 2016

STD 4

Max. Marks: 100
Time: 2 Hrs

Code No: F/040/16

Name:..... Reg. No:.....

All the answers should be marked in the answer sheet only

Select the most suitable answer from the following options and write A,B,C or D in the answer sheet.

(Question No. 1 to 38, 2 Marks each)

1. Who is the present Chief Minister of Delhi?



2. A number when rounded off to the nearest 100 gives 800. When rounded off to the nearest 10, it gives 850. What is the number?

- A. 785 B. 855
C. 845 D. 755


3. How many days are there in the year 2016?

- A. 364 B. 365
C. 366 D. 367

4. Who among the following is the famous boxer who died in June this year?



5. Which animal in the figure has an ear not belonging to it?



6. Which of the following is the skin of leopard?



7. Which is the language of Kolkata?

- A. Tamil
- B. Hindi
- C. Bengali
- D. Urdu

8. Which has correct spelling?

- A. Beautifull
- B. Beauetiful
- C. Butiful
- D. Beautiful

9. The price of 5 Kg of rice is Rs.165. How much rice one will get for 100 rupees?

- A. 3 Kg
- B. More than 3Kg
- C. Less than 3 kg
- D. $3\frac{1}{2}$ Kg

10. Which fraction is highest?

- A. $\frac{5}{8}$
- B. $\frac{6}{13}$
- C. $\frac{8}{21}$
- D. $\frac{12}{13}$

11. To copy a document we use

- A. shift +c
- B. ctrl + c
- C. ctrl + v
- D. shift + v

12. The capital of Odisha is

- A. Jharkhand
- B. Bhubaneswar
- C. Ranchi
- D. Konark

Fill in the blanks

13. A cube has corners

14. The green pigment in the plants that help to produce food is

15. The disease goitre is produced due to lack of

True or False

16. The present Governor of Kerala state is Venkataraman

17. Currency of Pakistan is rupee

18. The official language of Arunachal Pradesh is English

Rearrange the jumbled letters to form reasonable words.

19. A tiger reserve of Kerala

AEIYRPR

20. Capital of a country

AIDRY

21. A wild animal


DAREOLP

22. A peak

STEEVER

Select the odd one

23.




A

B

C

D

24.



A

B

C

D

25.

IDUKKI	KOTTAYAM	WAYANAD	TIRUR	PALAKKAD
--------	----------	---------	-------	----------

A

B

C

D

E

26.

4	16	32	36	64
---	----	----	----	----

A

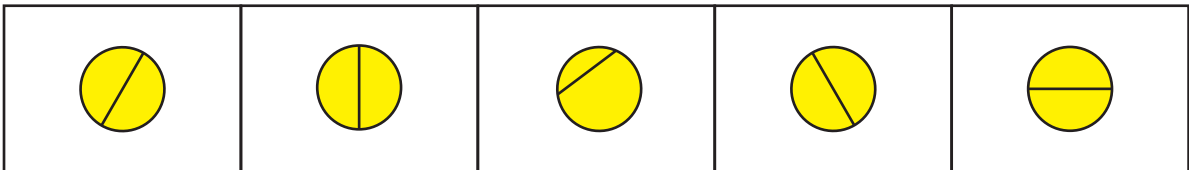
B

C

D

E

27.



A

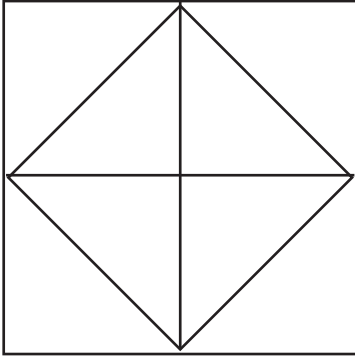
B

C

D

E

28. How many triangles are in the figure?



A. 11
C. 13

B. 12
D. 10

Cross matching.

Select from column B. Write the letter against the question number.

Column A

29.



30.



31.



32.



33.



Column B

A

INDIA

B

NEPAL

C

QATAR

D

EGYPT

E

AUSTRALIA

34. In a certain code language CARBON is written as BZQANM. How is MARBLE written in that language?

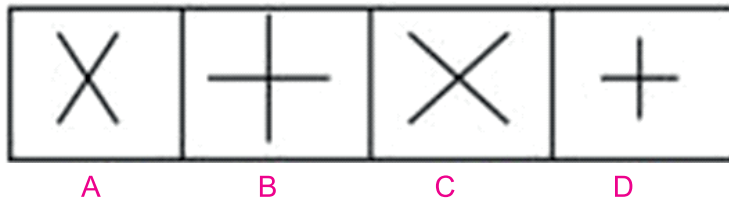
A. NZQAMF
C. LZQAMF

B. LZQAKD
D. LZQANF

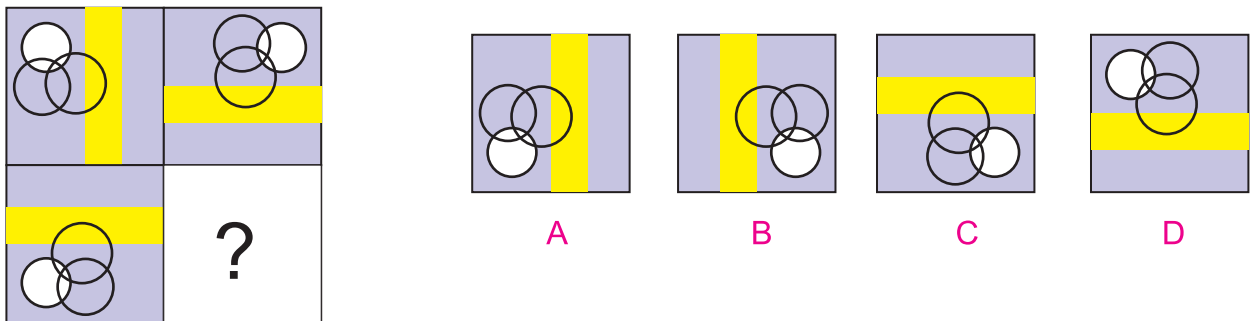
35. There is some relationship between diagrams 1&2. The same relationship persists between 3&4. Select the right diagram from the answer figures that replace the question mark.



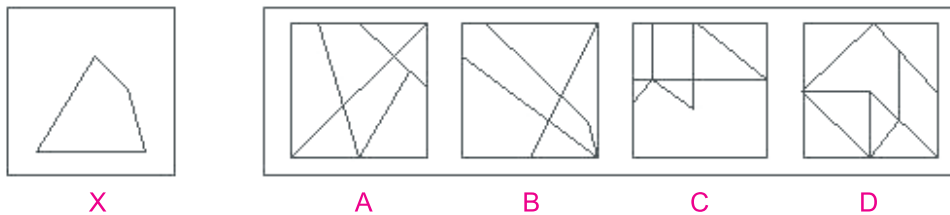
36. Select the figure different from others.



37. Identify the figure that can complete the pattern.



38. The figure 'X' is embedded in one of the options. Select it.



Copy the following neatly in the answer sheet


(6 Marks)

39.

Sincerity and hard work bring you success

40. Copy the picture and give the same colour

(8 Marks)



Draw a flower with leaves in the answer sheet and colour it.

(10 Marks)

41.

INTERNATIONAL SCHOLASTIC TALENT TEST(ISTT) 2016

Answer Sheet STD 4

Name:Reg. No :

School :

- | | | |
|----------|----------|----------|
| 1. | 14. | 27. |
| 2. | 15. | 28. |
| 3. | 16. | 29. |
| 4. | 17. | 30. |
| 5. | 18. | 31. |
| 6. | 19. | 32. |
| 7. | 20. | 33. |
| 8. | 21. | 34. |
| 9. | 22. | 35. |
| 10. | 23. | 36. |
| 11. | 24. | 37. |
| 12. | 25. | 38. |
| 13. | 26. | |

39.

40. Copy the picture and give the same colour

41. Using pencil draw a flower with leaves and colour it.