

--	--	--	--	--	--	--	--	--	--

Name of the student:..... Div:.....

Name of the School: .....

**I. Questions 1- 32 carry 1.5 mark each.**

**(48)**

**1. Choose the correct statement from the following.**

- a) Ginger and pepper are medicinal plants.
- b) Pumpkin plant is a shrub.
- c) Plants breathe with the help of chlorophyll.
- d) Oxygen is necessary for photosynthesis.





**2. Which gas is released during photosynthesis?**

- a) Hydrogen
- b) Oxygen
- c) Carbon dioxide
- d) Nitrogen





**3. The largest grass in the world is .....**

- a) Pampas grass
- b) Scutch grass
- c) Bamboo
- d) Lemon grass

**4. .... is an example for arthropods.**

a)	b)	c)	d)
			
Butterfly	Parrot	Rat	Sardine

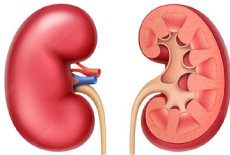
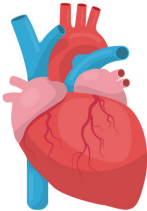

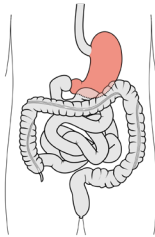
**5. Which of the following birds can imitate human sound?**

a)	b)	c)	d)
			
Crow	Duck	Eagle	Mynah

**6. Which is the suitable feature of Kangaroo?**

- a) It is the fastest animal on land.
- b) It is a Carnivorous animal.
- c) It has a pouch in its abdomen to carry young ones.
- d) It is a nocturnal animal.





**7. Which of these organs is located inside our rib cage?**

a)	b)	c)	d)
			
Kidney	Heart	Brain	Stomach

**8. Which of the following is not an excretory organ?**

- a) Skin
- b) Lungs
- c) Brain
- d) Kidney





**9. Which of the following is a nocturnal animal?**

a)	b)	c)	d)
			
Dog	Cow	Owl	Tiger

**10. Which of the following is 'true' about joint families?**

- a) Common in urban areas.
- b) Consist of only parents and their children.
- c) Consist of parents, children, grandparents, uncles, aunts and cousins.
- d) All of these.

**11. Choose an occupation from the following that needs mental work rather than physical work?**

a)	b)	c)	d)
			
Post man	Gardener	Engineer	Cobbler

**12. Which is the correct statement about leafy vegetables?**

- a) Rich in fat
- b) Rich in carbohydrate
- c) Rich in protein
- d) Rich in vitamins and minerals.

**13. Table tennis is also known as .....**

- a) Caroms
- b) Ping-pong
- c) Kabbadi
- d) Ludo

**14. Which of the following is a storage device?**

- a) Monitor
- b) Microphone
- c) Hard disk
- d) Printer

**15. Which of the following traffic signals indicates 'ready to stop'?**

- a) Red light
- b) Yellow light
- c) Green light
- d) None of these.

**16. They took two ..... rooms.**

- a) Seperate
- b) Separate
- c) Separete
- d) Saperate

**17. .... is the suitable synonym for 'Ancient'.**

- a) New
- b) Young
- c) Old
- d) Beautiful

**18. My sister gave me a .....of grapes.**

- a) crowd
- b) heap
- c) set
- d) bunch

**19. Aunt Jane cooks tasty pastry, cakes and spicy sandwiches.**

**This sentence consists of .....common nouns.**

- a) one
- b) two
- c) three
- d) four

**20. Which of the following is the set of proper nouns?**

- a) Book, pen, pencil.
- b) Town, country, Village.
- c) Ganga, Sindu, Kaveri.
- d) Ocean, Mountain, River.

**21. 'One' is the homophone of .....**

- a) On
- b) Van
- c) Won
- d) Only

**22. The plural form of 'Child' is .....**

- a) childs
- b) childrens
- c) children
- d) children's

**23. Find the set of neutral gender nouns from the following.**

- a) Boy, child
- b) Delhi, Chair
- c) Teacher, Engineer
- d) Cock, Hen

**24. An activity done for enjoyment and relaxation is .....**

- a) Homework
- b) Profession
- c) Task
- d) Recreation

**25. .... and .....are examples for outdoor games.**

- a) Tennis, Ludo
- b) Volleyball, Chess
- c) Volleyball, Tennis
- d) Football, Ludo

**26.The sum of two odd numbers will be -----**

- a) an odd number
- b). an even number
- c) a one digit number
- d). an odd or an even number.

**27. Add 2500 and 1600 .Then add 370 to the resulting sum.**

**The total sum will be-----**

- a) 4470
- b) 4370
- c) 4710
- d) 4740

**28.6100- 60 - 40 =-----**

- a) 6020
- b) 6040
- c) 6060
- d) 6000

29.  $30 \times 300 = \text{-----}$

- a) 9000      b) 9900      c) 900      d) 990

30. The product of 2 numbers is 210. If one of the numbers is 6, which is the other number?

- a) 30      b) 35      c) 34      d) 36

31. 1258 is the immediate successor of -----

- a) 1259      b) 1256      c) 1260      d) 1257

32. Which of the following has 6 faces?

- a) cone      b) cube      c) cylinder      d) Sphere

II. Questions 33- 53 carry 2 marks each.

(42)

33. Find the missing digit?

$$\begin{array}{r} 5 \ ? \ 4 \ 7 \ - \\ \underline{3 \ 9 \ 7 \ 6} \\ \underline{1 \ 3 \ 7 \ 1} \end{array}$$

- a) 4      b) 6      c) 5      d) 3

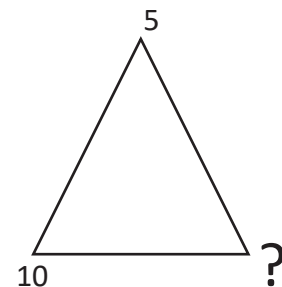
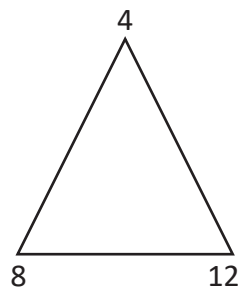
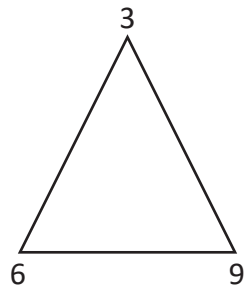
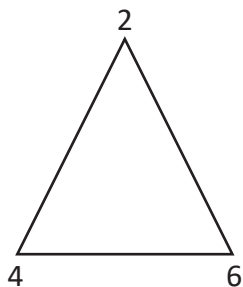
34. Find the remainder in the given division  $709 \div 5$

- a) 6      b) 4      c) 7      d) 3

35.  $50 : 100 :: 500 : \text{-----}$

- a) 200      b) 100      c) 1000      d) 400

36. Replace the question mark?



- a) 20      b) 15  
c) 25      d) 30

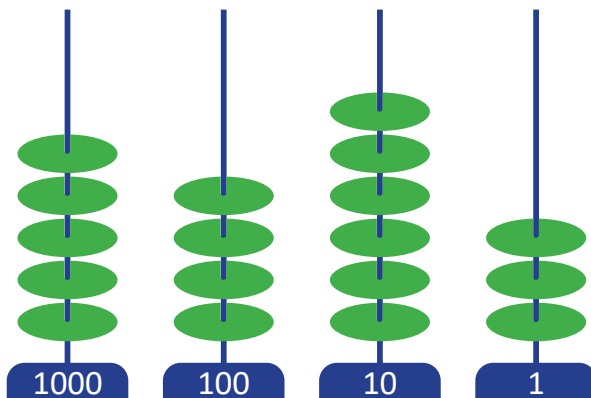
37. Which is the digit in the ones place of  $45 \times 32$ ?

- a) 0                      b) 5                      c) 7                      d) 3

38. Which of the following can be written as sum of two consecutive natural numbers?

- a) 124                      b) 136                      c) 113                      d) 238

39.



5463 is shown on the Abacus. Richu wants to make it 7462. He has to,

- a) remove 2 beads from 1000 and add one bead on 10.  
b) add 2 beads on 1000 and remove 2 beads from 1.  
c) remove 2 beads on 1000 and remove 1 bead from 10.  
d) add 2 beads on 1000 and remove 1 bead from 1.

40. What is the difference of the largest and smallest four digit numbers formed using 3, 5, 9 and 7 without repeating the numbers.

- a) 7146                      b) 7164                      c) 4167                      d) 6174

41. A pen and a pencil cost rupees 14. The cost of the pen is 4 more than the pencil. Then the price of the pen is.....

- a) 12                      b) 10                      c) 9                      d) 11

42. Anshad has 2600 rupees with him. He has 500, 100, and 50 rupees equally. What is the number of total notes with him?

- a) 10                      b) 15                      c) 12                      d) 13

43. How many less is 4444 than 10000?

- a) 6666                      b) 5554  
c) 5556                      d) 6654

**44. Which is the number if the digits in the place of tens and thousands are interchanged in 5468?**

- a) 6458                      b) 8456
- c) 5486                      d) 4586

**45. Anoop has 300 rupees with him. Anjana has 250 more than Anoop and Subaida has 50 less than Anjana. Rahim has an amount equal to Anjana. What is the total amount all the four have?**

- a) 1850                      b) 1350
- c) 1750                      d) 1900

**46. 1 GB = .....MB.**

- a) 1000                      b) 1008
- c) 1024                      d) 1032

**47. Which of the following represents the working of a computer?**

- a) Input- output-processing
- b) Input- processing - output.
- c) output - Input - processing
- d) output-processing – Input.

**48. Which of the following is called the dustbin of a computer?**

- a) Task bar                      b) Menu bar
- c) Recycle bin                      d) Desktop

**49. If 'White' is called 'Red', Red is called Yellow' and Yellow' is called Black, then what is the colour of Banana?**

- a) White                      b) Red
- c) Black                      d) Yellow

**50. If 'TAP' is written as 543, then what would be 345?**

- a) APT                      b) PTA                      c) TPA                      d) PAT

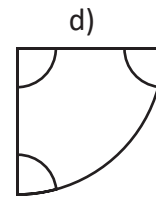
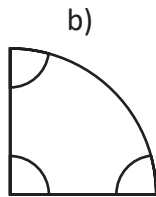
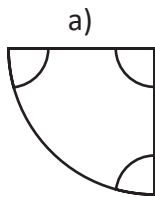
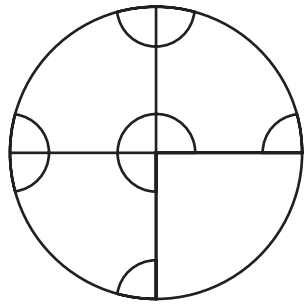
**51. AB: EF :: PQ : ?**

- a) UV                      b) RS                      c) ST                      d) TU

**52. India : Country :: ? : State.**

- a) Asia                      b) Kerala
- c) Mumbai                      d) New Delhi

53. Which of the following will complete the given picture?



III. Question 54 Carries 10 marks.

(10)

54. Complete the drawing and colour it using colour pencils

