

--	--	--	--	--	--	--	--	--	--

Name of the student:..... Div:.....

Name of the School:

1. The scientific study of soil is called?

- a) Selenology
- b) Paleontology
- c) Anthology
- d) Pedology

2. Which layer is the hottest layer of atmosphere?

- a) Exosphere
- b) Troposphere
- c) Stratosphere
- d) Thermosphere

3. Find out the correct statement?

- a) The ozone layer is found in the stratosphere
- b) On, heating, the air molecules contract.
- c) Ionosphere is the outermost layer of our atmosphere
- d) all of these

4. The innermost layer of the earth is made up of

- a) Copper and zinc
- b) Iron and Nickel
- c) Sulphur and Carbon
- d) Silver and strontium

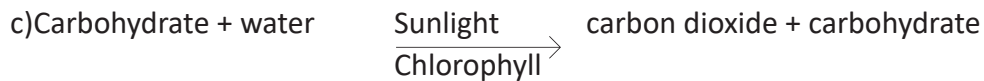
5. What is magma?

- a) Minerals stored in the inner core of the earth.
- b) Igneous rock that transformed into metamorphic rock
- c) Extremely hot molten rock that is stored within the Earth's crust.
- d) Tiny particles of sedimented rock.

6. Which of the following is a sedimentary rock?

- a) Granite
- b) Shale
- c) Phyllite
- d) Pumice

7. Which of the following is the correct equation of photosynthesis in plants?



d) All are false

8. Which of these is a parasite?

- a) Mushroom
- b) Pitcher plant
- c) Lotus
- d) Cuscuta

9. Which of these is not digested by human being?

- a) Proteins
- b) Cellulose
- c) Carbohydrates
- d) Fats

10. Vitamin soluble in water.

- a) K
- b) E
- c) D
- d) C

11. Which of the following is the correct way of air in human body?

- a) Nose → Trachea → Nasal cavity → Bronchi → Bronchiole → Alveoli
- b) Nose → Nasal cavity → Bronchi → Bronchiole → Trachea → Alveoli
- c) Nose → Nasal cavity → Trachea → Bronchi → Bronchiole → Alveoli
- d) None of these

12. Which of the following gives red colour to the RBC?

- a) Plasma
- b) Platelets
- c) Haemoglobin
- d) Capillaries

13. Find out the false statement?

- a) RBC do not have nucleus
- b) Xylem is found outside the Vascular bundle.
- c) Human heart has four chambers
- d) Cell wall of xylem is thicker than that of phloem.

14. Processor is fixed on the

- a) Motherboard
- b) Chipboard
- c) Monitor
- d) Memory slot

15. HTML stands for ?

- a) Hyper Text Markup Language
- b) Hyper Text Marking Language
- c) High Tone Marking Language
- d) High Tech Markup Language

16. $(-6x - 8) + (7x - 9) - (-4x - 4) =$ -----

- a) 31
- b) -31
- c) -1
- d) 1

17. Which is the smallest in the group?

-12, -20, 54, 35, 0, -4

- a) -4
- b) -12
- c) -20
- d) 0

18. Find the value of 'a' , if $16 - (-a) = 26$

- a) 10
- b) 16
- c) 26
- d) 36

19. Which of the following pairs has the same rational numbers?

- a) $21/25$ and $7/30$
- b) $5/8$ and $50/40$
- c) $20/50$ and $2/3$
- d) $21/30$ and $7/10$

20. Find the value of expression $5a + 6b + 4c$,for $a=5$, $b=9$ and $c=1$

- a) 83
- b) 79
- c) 81
- d) 100

21. What should be subtracted from $(a-b)$ to get $-2b$?

- a) $a-b$
- b) $2a$
- c) ab
- d) $a+b$

22. $72 \text{ km/h} =$ ----- m/s ?

- a) 25
- b) 20
- c) 30
- d) 15

23. A bus travels 500 meters in a minute. The speed of the bus is-----

- a) 28 km/h
- b) 35 km/h
- c) 30 km/h
- d) 50 km/h

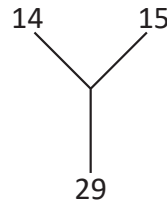
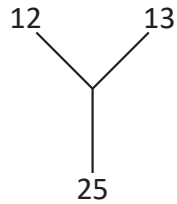
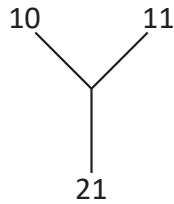
24. Rishi runs with a speed of 12 km/h. How long can he run in 5 minutes?

- a) 1km b) 2km
- c) 1.5 km d) 1.25 km

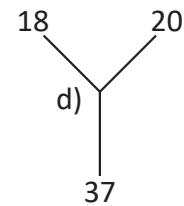
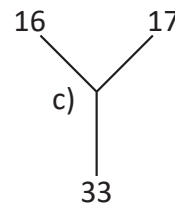
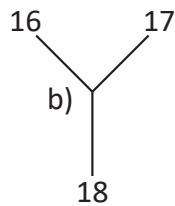
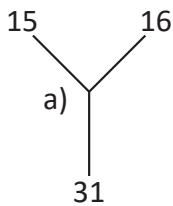
25. $6/2$; $20/4$; $42/6$; -----?

- a) $48/6$ b) $68/8$
- c) $72/8$ d) $56/8$

26. Which figure comes next?



.... ?



27. Pick out the odd one?

100, 121, 169, 200

- a) 100 b) 121 c) 169 d) 200

28. Some numbers are coded as

123=8

245=28

352=25 and

624= 20 then What is 872?

- a) 60 b) 70 c) 80 d) 90

29. A man did $1/3$ part of a work on first day . He did $2/3$ part of the remaining work on second day . What part of the total work is remaining now?

- a) $11/27$ b) $5/6$ c) $2/3$ d) $16/27$

30. Which is the number -4 less than -5?

- a) -1 b) -9 c) 9 d) 1

31. What is the product of $3a \times 4a \times 2y$?

- a) $24 a^2 y^2$ b) $24 ay^2$
c) $24 ay$ d) $24a^2 y$

32. What is the difference of a % of b and b % of a ?

- a) 100 b) 10 c) 0 d) 1

33. Average of 10 numbers is 20. When one number was added to it the group average became 19 . The added number is -----

- a) 11 b) 9 c) 19 d) 10

34. 10 million=-----?

- a) 1 crore b) 10 crore
c) 10 lakhs d) 100 crore

35. A rectangle has an area 48 sq.cm. When the length of it was increased by 5 cm. area of the rectangle became 78 sq.cm. What is the breadth of the first rectangle?

- a) 10 cm b) 9cm
c) 7cm d) 6cm

36. Who is the father of Internet?

- a) Vinton cerf b) Richard Stallman
c) Alan turing d) Charls Babbage

37. Which is the first computer virus?

- a) Reaper b) Creeper
c) Avira d) Norton

38. The short key function of 'undo' function

- a) Ctrl+Z b) Ctrl+X
c) Ctrl+Y d) Ctrl+C

39). Venue of 2024 Olympics?

- a) Tokyo b) Paris
c) Russia d) Australia

40). The new Prime minister of UK?

- a) Liz truss
- b) Boris Johnson
- c) Rishi Sunak
- d) Thersa May

Replace the underlined word with a similar one in meaning

41. Pupa lives in a fragile cocoon

- a) Plain
- b) delicate
- c) silky
- d) comfortable

Read the given sentence and replace the underlined word with its antonym.

42. This video game gives the illusion that you are in control of an aero plane.

- a) confusion
- b) delusion
- c) reality
- d) imagination

use the appropriate question tag.

43. He ate an apple;

- a) doesn't he?
- b) didn't he?
- c) did he ?
- d) isn't he?

Change the sentence in to passive voice.

44. She is reading a book.

- a) a book was read by her.
- b) a book is being read by her
- c) a book has been read by her
- d) a book was being read by her.

Complete the given sentence in indirect speech

45. The boy said; "I must go home"

The boy said that

- a) he had to go home
- b) he must go home
- c) he wish to go home
- d) he want to go home

Convert the sentence in to direct speech

46. She said that she hadn't eaten anything that day.

- a) she said, "I hadn't eaten anything today"
- b) she said, "I haven't eaten anything today".
- c) she said, "I didn't eat anything today".
- d) she said, "I haven't eaten anything that day".

Read the poem and choose the right answer from the options

The mountain and the squirrel

The mountain and the squirrel had a quarrel;
And the former called the latter "little prig"
Bun replied,
"You are doubtless vey big;
But all sorts of things and weather
Must be taken in together
To make up a year
And a sphere,
And I think it no disgrace
To occupy my place
If I'm not so large as you,
You are not so small as I,
And not half so spry;
I'll not deny you make
A very pretty squirrel track.
Talents differ;all is well and wisely put;
If I cannot carry forests on my back,
Neither can you crack a nut"

(R.W Emerson)

47. The mountain called the squirrel "little prig" because :

- | | |
|---------------------------|---------------------|
| a) it is young and active | b) it is very small |
| c) it is a new born | d) it is very short |

48. Bun in the poem stands for ;

- | | |
|---------------------------|-----------------|
| a) small sweet round cake | b) the mountain |
| c) the squirrel | d) the poet |

49. And I think it no disgrace.

What is the disgrace ?

- a) occupying one place on the mountain
- b) iam very small in size
- c) you are very big
- d) i cannot carry forests on my back.

50. Who is much more spry ?

- | | |
|-----------------|-----------------|
| a) the weather | b) poet |
| c) the squirrel | d) the mountain |