

--	--	--	--	--	--	--	--	--	--

Name of the student:..... Div:

Name of the school:

Question 1-32 carry 1.5 Marks to each question.

(48)

1. Which of the following is a non-living thing?



a) Tiger



b) Dove



c) Fish



d) Chair

2. Factors needed by living things to live

a) Food, Water, Air,

b) House, Book, Food

c) Water, Food, Parents

d) Soil, Air, House

3. The feature which do not satisfy with a coconut tree

a) Reproduction

b) Move freely


c) Respiration

d) Growth

4. Which of the following is an odd one?



a) Orange



b) Jackfruit



c) Ladies Finger



d) Apple

5. Which is the largest flower in the world?



a) Lotus



b) Rafflesia



c) Hibiscus



d) Wolffia

6. Which of the following is incorrect

- a) Grapes - Fruit
- b) Pumpkin - Vegetable
- c) Rice - Fruit
- d) Cabbage - Leaf

7. I am an animal;

I can live only in water.

I have no legs, who am I?



a) Giraffe



b) Parrot



c) Fish



d) Frog

8. Flies and butterflies are

- a) Insects
- b) Birds
- c) Reptiles
- d) Fishes

9. Which one of the following is a sense organ ?

- a) Hand
- b) Leg
- c) Head
- d) Skin

10. How many bones does an adult human have?

- a) 207
- b) 206
- c) 216
- d) 306

11. Who is the prime minister of India?



a) Narendra Modi



b) Pinarayi Vijayan



c) Jawaharlal nehru



d) Mahathma Gandhi

12. Colour of Indian flag from top to bottom

- a) Red, Green, White
- b) Saffron, White, Green
- c) Green, White, Saffron
- d) White, Green, Blue

13. Which vehicle has more wheels ?



a) Bus



b) Lorry



c) Car



d) Train

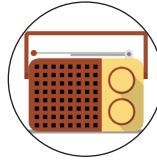
14. We can speak to a distant person through



a) Computer



b) Mobile Phone



c) Radio



d) Television

15. Who among the following is a famous cricket player?



a) Sania Mirza



b) Saina Nehwal



c) Sachin Tendulkar




d) Lionel Messi

16. Which of the following figure is made using rectangle, triangle and circle?



a)



b)



c)



d)

17. Which of the following numbers come in between 8 and 18?

A. 3 and 16

B. 7 and 15

C. 17 and 13

D. 9 and 19

18. Which of the following is in spherical shape?

A. Egg

B. Book

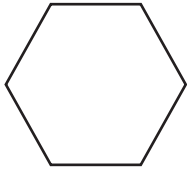
C. Ball

D. Leaf

19. How many 1 is used to write numbers from 9 to 20?

- A. 11
- B. 10
- C. 12
- D. 9

20. How many corners and sides have in the following figure?



- A. 3 corners and 3 sides
- B. 6 corners and 5 sides
- C. 6 corners and 6 sides
- D. 5 corners and 6 sides

21. How many apples are there in the basket?



- A. 5
- B. 3
- C. 4
- D. 2

22. We go to school in the

- A. morning
- B. evening
- C. noon
- D. night

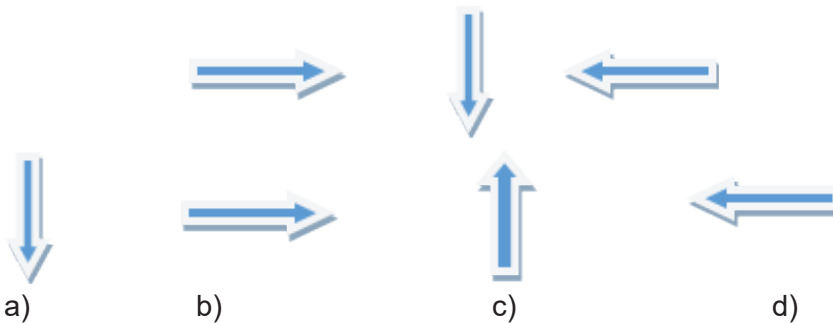
23. Which of the following gives the sum 15?

- A. $9+7$
- B. $7+6$
- C. $5+9$
- D. $8+7$

24. Which of the following is NOT correct?

- A. $18 > 13$
- B. $25 = 25$
- C. $12 > 13$
- D. $15 < 16$

25. Which comes next?



26. The number before 87 is -----

- A. 88 B. 86 C. 89 D. 90

27. How many 10 make 50?

- A. 4 B. 5 C. 3 D. 6

28. 2 tens added to 7 ones gives

- A. 72 B. 9 C. 29 D. 27

29. One of the following sets is not in the correct order. Which is that?

- A. 12,13,14,15,16,17 B. 13,14,15,16,17,18
C. 11,12,13,14,15,16 D. 16,17,18,19,21,20

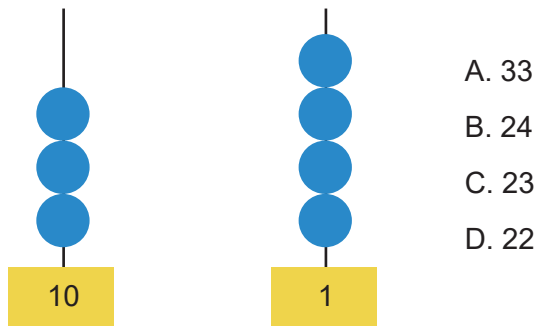
30. Which is equal to $9+6$?

- A. $9+1+5$ B. $9+1+4$ C. $9+1+3$ D. $9+2+1$

31. A number added to 6 gives 10. Which is the number?

- A. 5 B. 6 C. 4 D. 3

32. Look at the abacus. 34 is shown on that. Ramesh removed one bead from tens and one from ones. Then which will be the number on that?



Question 33 to 48 carry 2 Marks each

(32)

33. Which of the following word does not rhyme with 'date'.

- a) Ate b) Late
c) Time d) Hate

34. Read the word given and choose its meaning from the options.

'Yell'

- a) Loud shout b) Angry
c) Smell d) Smile

35. What is the opposite word for 'Tiny'

- a) Strong b) Huge
c) Small d) Short

36. Find the synonyms from the following pairs.

- a) Long and large b) Small and short
c) Big and large d) Fat and thin

Read the following story and answer the questions given below.

Five cows lived in a village near a forest. They ate fresh grass from the green fields. They were good friends. They decided to do everything together so that lions couldn't attack them for food. One day the five cows fought and each one started to eat grass from different places. The lion decided to use this opportunity and killed them one by one.

37. Where do the cows live?

- a) In a village b) In a forest
c) In the town d) In a valley

38. The cows ate

- a) Dry grass b) Green plants
c) Fresh grass d) Banana leaves

39. Who attacked the cows?

- a) The hunter b) The tiger
c) The farmer d) The lion

40. What happened to the cows in the end?

- a) Fought each other b) Became good friends
c) Killed by the lion d) Killed by the tiger

Match the following famous cartoon characters.

41. ScoobyDoo

a)



42. Mickey Mouse

b)



43. Popeye

c)



44. Goofy

d)



45. Which is the capital of Kerala?

- a) Trissur
- b) Ernakulam
- c) Thiruvananthapuram
- d) Kozhikode

46. Chachaji is the nick name of?

- a) Mahathma Gandhi
- b) Subhash Chandra Bose
- c) Sardar Vallabhbhai Patel
- d) Jawahar Lal Nehru

47. Who invented Mobile Phone?



- a) Michael McKubre
- b) Morrison Philip
- c) Martin Cooper
- d) Murad Ferid

48. Which person below indicates as an airhostess?



a)



b)




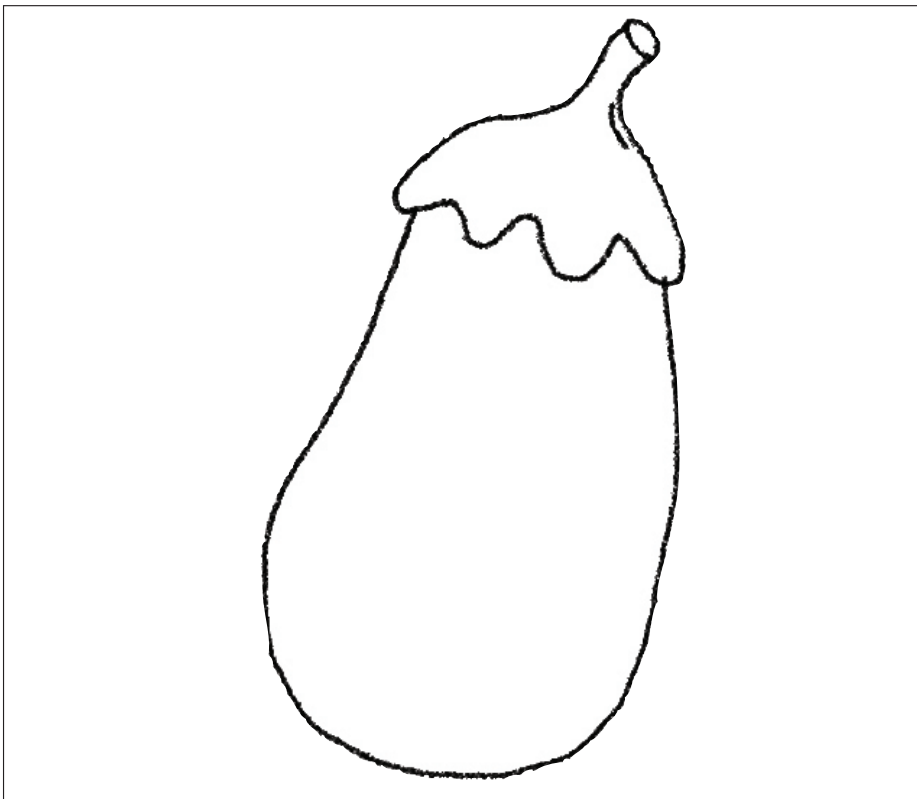
c)



d)

49. Colour the brinjal using colour pencils as shown in the picture.

(10)



50. Complete the drawing of the car and colour it, use colour pencils.

(10)

