

# INTERNATIONAL SKILL ENHANCEMENT TRAINING (iSET) 2019


## CLASS 2

- Max Marks 100
- All questions are compulsory.
- Each question carries 2 marks.

Name: \_\_\_\_\_

Reg No.: \_\_\_\_\_

1. There are \_\_\_\_\_ girls between Anna and Rini.



- a. 3  
b. 2  
c. 5  
d. 4
2. A plant is a living thing because \_\_\_\_\_  
a. It grows  
b. It breathes  
c. It can make more plants  
d. All of the above
3. The picture given here shows that our house keeps us safe from \_\_\_\_\_  
a. Heat  
b. Rain  
c. Cold  
d. Strong wind
4. Which of the following is INCORRECT?  
a. We can see air  
b. Moving air is wind  
c. Air takes space  
d. Air is around us
5. Complete the sentence: Summer says are \_\_\_\_\_  
a. Cold  
b. Wet



- c. Hot
- d. Windy

6. Aziz is sitting between Rahman and Kaja. Which of the following is the correct order?

a. 

Aziz	Rahman	Kaja
------	--------	------

b. 

Rahman	Kaja	Aziz
--------	------	------

c. 

Kaja	Aziz	Rahman
------	------	--------

d. 

Aziz	Rahman	Kaja
------	--------	------

7. Which of the following can hold more water?



8. Which of the following shows ascending order:

- a. 15 - 13 - 12 - 10
- b. 7 - 8 - 9 - 10
- c. 18 - 17 - 16 - 15
- d. 25 - 17 - 19 - 20

9. The candles on the cake show the age of four friends. Who is the eldest?

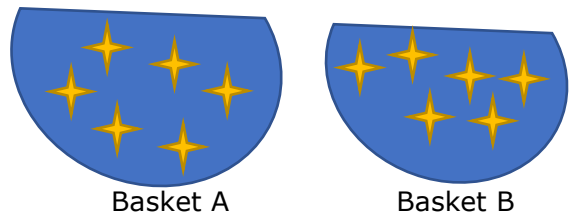


10. Sonu had 7 toffees. His brother took away 2 toffees. How many does Sonu have now?

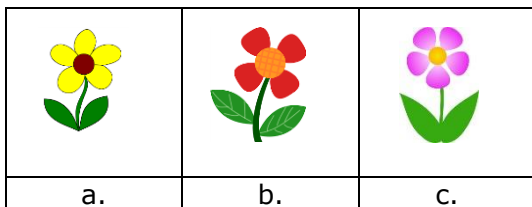

- a. 7
- b. 5
- c. 2
- d. 9

11. Based on the picture, which of the statements are true?

- a. There are 2 stars LESS in basket A
- b. There are 2 stars LESS in basket B
- c. There are EQUAL number of stars in both the baskets
- d. There is 1 stars more in Basket B



12. What will be the next figure?



13. Riya is taller than Shari and Sudha, Preeti is taller than Riya. Who is the tallest?

- a. Riya
- b. Preeti
- c. Shari
- d. Sudha

14. Kunal put his hand into a box and made the following comments.

It is cold. It is rough. It is hard.






Which sense organ did Kunal use to make these descriptions?

- a. Ear
- b. Skin
- c. Tongue
- d. Nose





15. My father's brother is my \_\_\_\_\_.

- a. Uncle
- b. Cousin
- c. Aunt
- d. Grandfather

16. What is next in this series?

					?
---	---	---	---	---	---

			
a.	b.	c.	d.

17. Largest 2-digit number is \_\_\_\_\_

- a. 90
- b. 100
- c. 10
- d. 99

18. The height of this tree is \_\_\_\_\_

- a. 2 units
- b. 3 units
- c. 4 units
- d. 1 units
- e.




19. 5 hundreds, 1 hundred and 5 ones make \_\_\_\_\_





- a. 515
- b. 551
- c. 155
- d. 555

20. How many sleeping lines are there in this figure?





- a. 5
- b. 6
- c. 4
- d. 3







21. Identify the insect: I collect honey.

			
a.	b.	c.	d.

22. I am a star. I give you light. You cannot see me at night. Who am I?

			
a.	b.	c.	d.

23. Which is the national flower of india?

			
a.	b.	c.	d.

24. Who is the current President of India?

- a. Narendra Modi
- b. Ramnath Kovind
- c. APJ Abdul Kalam
- d. Aravind Kejriwal

25. Identify the name of young one of a lion.


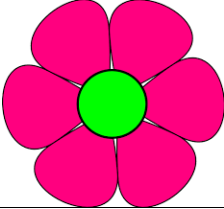



- a. Cub
- b. Kid
- c. Calf
- d. Lion

26. After I sneeze, I say \_\_\_\_\_.





- a. You are welcome
- b. Beg your pardon
- c. Good morning
- d. Excuse me


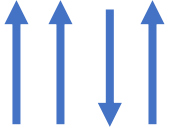
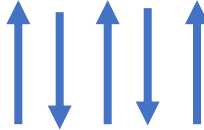
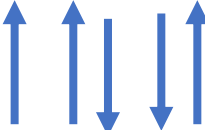


Match the following:

	Function of the part of the plant	Parts of a plant
27	Makes the food for the plant	
28	Gets water for the plant from the soil	
29	Contains seed	
30	Gives out a sweet smell	
31	Carries the water from roots to leaves	

32. complete the series:

				
---	---	---	--	--

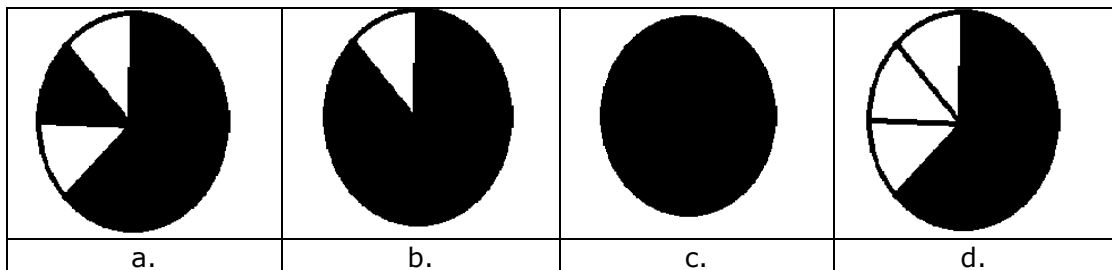
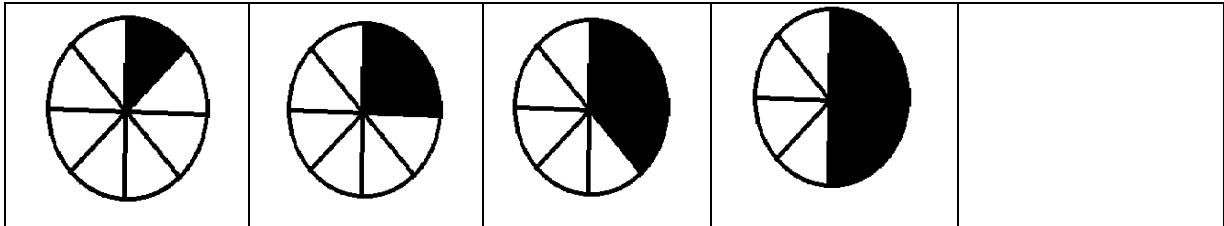
			
a.	b.	c.	d.

33. Complete the series:

ABA, BCB, CDC, DED, EFE, \_\_\_\_\_

- a. FGF
- b. FEF
- c. AFA
- d. FDF

34. Complete the series:



Questions 35 To 37, Fill in the blanks:

35. There are \_\_\_\_\_ bones in our body.

- a. 400
- b. 206
- c. 123
- d. 25

36. Earth is the \_\_\_\_\_ planet from the sun.

- a. Third
- b. Fourth
- c. Seventh
- d. Fifth

37. There are \_\_\_\_\_ days in February in a leap year.

- a. 26
- b. 27
- c. 28
- d. 29

Questions 38 to 40, write true or false:

38. Vehicles must stop when the traffic light is red. True

39.  $70 + 0 = 0$ . False

40. Ice melts when heated. True

41. Fill in the blank:

Pen	Paper
-----	-------

Chalk	?
-------	---

- a. Pencil
- b. Blackboard
- c. Cloth
- d. Wall

42. Choose the right spelling:

- a. Elephant
- b. Elaphent
- c. Elefant
- d. Elepent

Read the following passage and answer the questions 43 to 48:

Jaggu wants a dog. He walks to the pet store. Jaggu sees the animals at the pet store.

He sees the cats. He sees the rabbits. He sees the birds. He sees the mice. He sees the dogs.

"How much does the dog cost?" Jaggu says.

"Two hundred Rupees," the man says.

Jaggu gives the man two hundred Rupees.

Jaggu buys the dog. The dog walks home with Jaggu. Now Jaggu has a pet.

43. What kind of pet does Jaggu want?

- a. a bird
- b. a cat
- c. a dog
- d. a rabbit

44. What kinds of animals does Jaggu see at the pet store?

- I. rabbits
- II. mice
- III. lizards

- a. I only
- b. I and II only
- c. I, II, and III
- d. I and III only

45. Jaggu does not see the

- a. Mice
- b. Cats
- c. Dogs



d. Fish

46. How does Jaggu return home?

- a. He walks
- b. By bus
- c. By train
- d. On a cycle

47. How much does the dog cost?

- a. 100 Rupees
- b. 200 Rupees
- c. 150 Rupees
- d. 300 Rupees

48. What is the best title for this passage?

- a. Jaggu Sees the Cats
- b. Jaggu Buys a Pet
- c. Jaggu returns home
- d. Two hundred Rupees

Answer questions 49 and 50 based on the following:

Karim ate a mango. He buried the seed in the soil. He watered the seed regularly.

49. What would happen after a few days?

- a. A small mango plant will start growing out from the mango seed.
- b. Lots of mangoes will be on the mango seed.

50. How long will it take before the mango tree gives fruits?

- a. A few days
- b. A few weeks
- c. A few years